













Help Granny count the candies in the containers. Write the correct amounts in the empty boxes on the board below.

The illustration shows a candy counter with a woman named Granny behind it. On the top shelf, there are eight jars containing: 1 blue square, 3 yellow hearts, 2 blue circles, 3 red squares, 2 green hearts, 3 yellow triangles, 4 red hearts, and 3 green squares. On the counter, there are four more jars: 4 yellow rectangles, 5 red circles, 4 blue rectangles, and 4 green circles. Below the counter is a board with 12 empty boxes for counting, arranged in three rows and four columns. Each box is preceded by a candy shape and an equals sign.

 =	<input type="text"/>	 =	<input type="text"/>	 =	<input type="text"/>	 =	<input type="text"/>
 =	<input type="text"/>	 =	<input type="text"/>	 =	<input type="text"/>	 =	<input type="text"/>
 =	<input type="text"/>	 =	<input type="text"/>	 =	<input type="text"/>	 =	<input type="text"/>